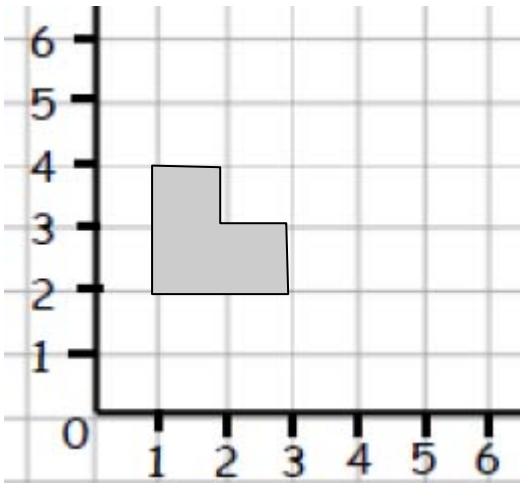


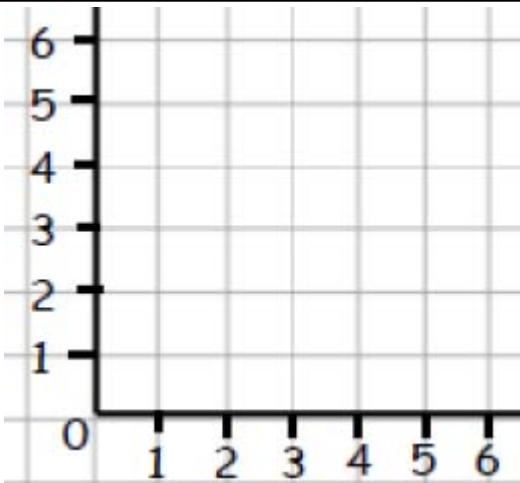
A



Always start with this shape:

- 1) U2 (up 2)
- 2) R3 (right 3)
- 3) D2 (down 2)

B



Plot these points (3,4), (3,6), and (6,4)

Join them up to make a triangle.

- 1) Translate the shape L3. Write the new coordinates?

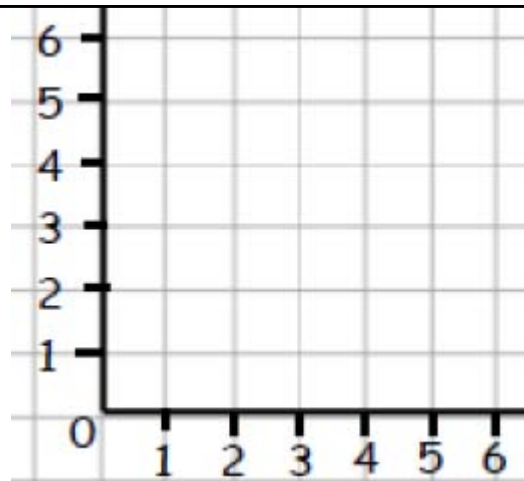
- 2) Start with the first triangle. Translate L3.

What are the new coordinates?

- 3) Start with the first triangle. Translate D3.

What are the new coordinates?

C



Plot these points (3,2), (4,3), (6,1), and (5,0)

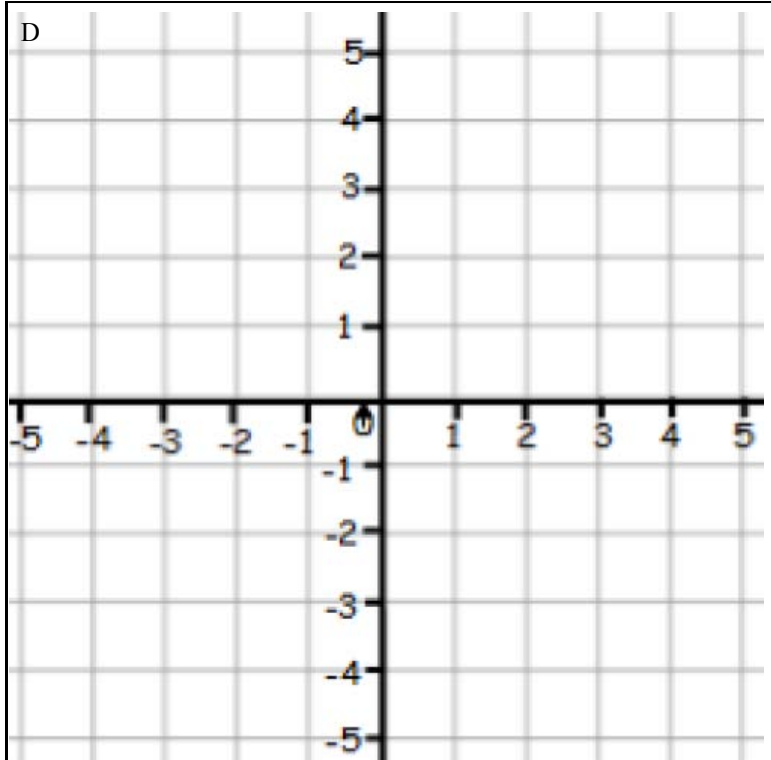
Join them up to make a quadrilateral.

- 1) Translate L1 U3. What are the new coordinates?

- 2) Start with the first quadrilateral. Translate L3 U1.

What are the new coordinates?

D



Plot these points (1,2), (2,5), (4,5), and (4,2)

Join them up to make a quadrilateral.

- 1) Translate L6 D6. What are the new coordinates?
