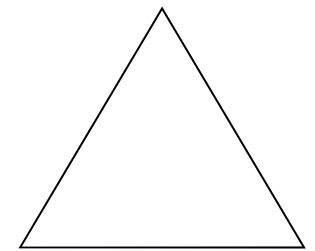


Complete the multiplication/division triangles. The first one is done for you.

1) Find the missing number.

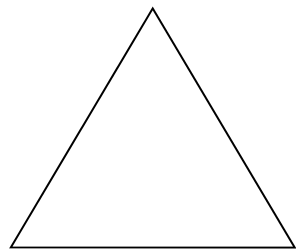
2) Complete 1 multiplication, then 2 possible division questions.



$$\square \times \square = \square$$

$$\square \div \square = \square$$

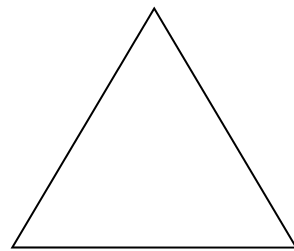
$$\square \div \square = \square$$



$$\square \times \square = \square$$

$$\square \div \square = \square$$

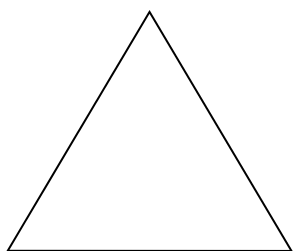
$$\square \div \square = \square$$



$$\square \times \square = \square$$

$$\square \div \square = \square$$

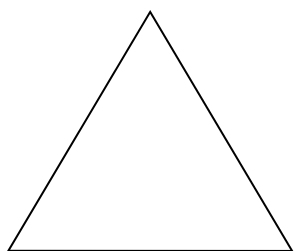
$$\square \div \square = \square$$



$$\square \times \square = \square$$

$$\square \div \square = \square$$

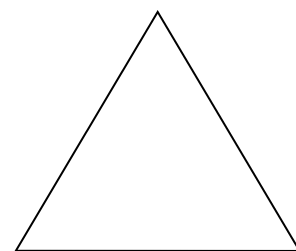
$$\square \div \square = \square$$



$$\square \times \square = \square$$

$$\square \div \square = \square$$

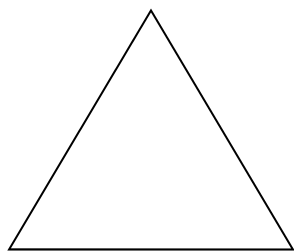
$$\square \div \square = \square$$



$$\square \times \square = \square$$

$$\square \div \square = \square$$

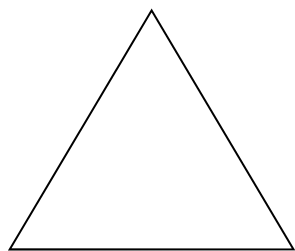
$$\square \div \square = \square$$



$$\square \times \square = \square$$

$$\square \div \square = \square$$

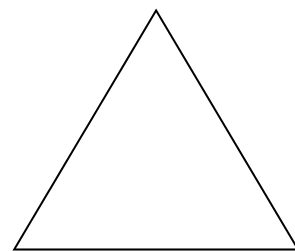
$$\square \div \square = \square$$



$$\square \times \square = \square$$

$$\square \div \square = \square$$

$$\square \div \square = \square$$



$$\square \times \square = \square$$

$$\square \div \square = \square$$

$$\square \div \square = \square$$